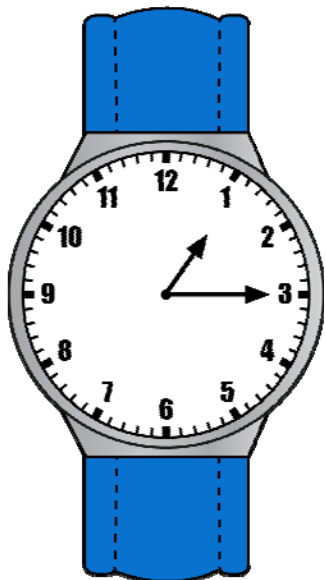
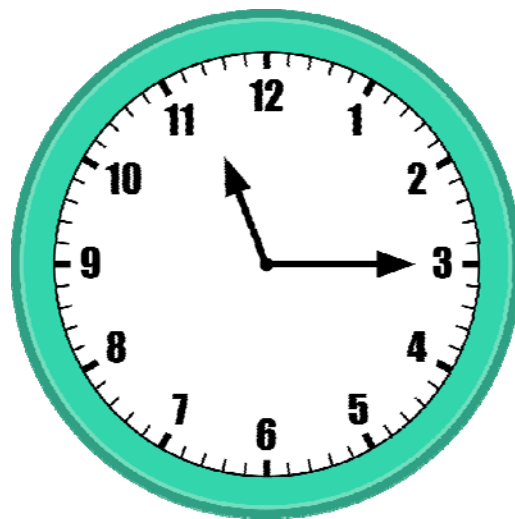



Telling Time and Elapsed Time Problem Solvers



Telling time to
the nearest
minute and
elapsed time
3.MD.A.1

Name: _____ Date: _____

Telling Time and Elapsed Time Problem Solvers I

Write the time to the nearest minute in digital form.

A)



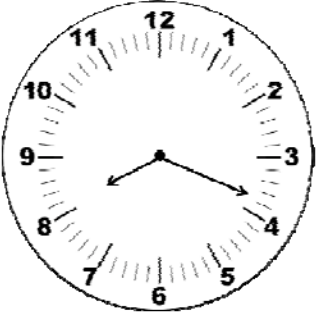
Answer: _____

B)



Answer: _____

C)



Answer: _____

D)



Answer: _____

E)



Answer: _____

F)



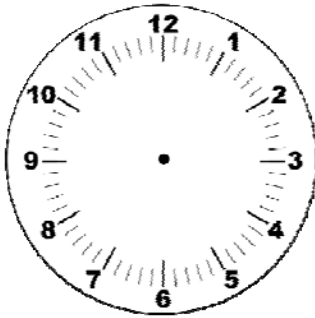
Answer: _____

Name: ----- Date: -----

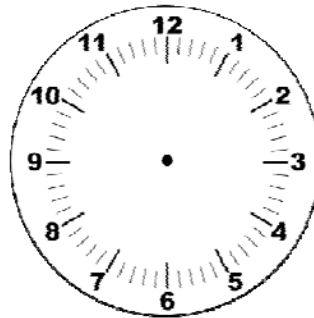
Telling Time and Elapsed Time Problem Solvers 2

Draw the correct time on the clocks below.

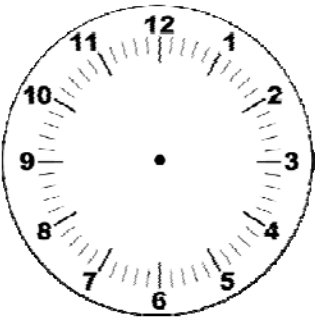
A) 12:43



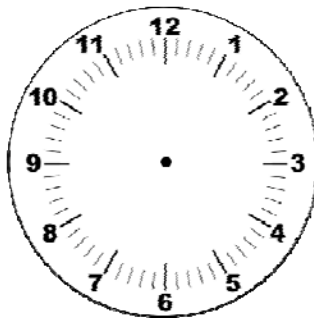
B) 4:27



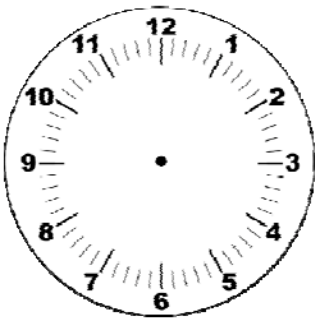
C) 2:14



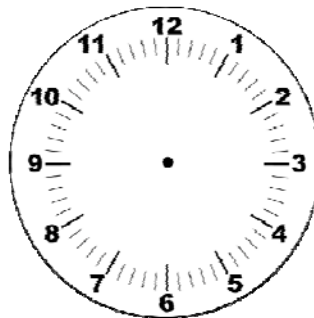
D) 8:51



E) 5:38



F) 7:02



Name: Date:

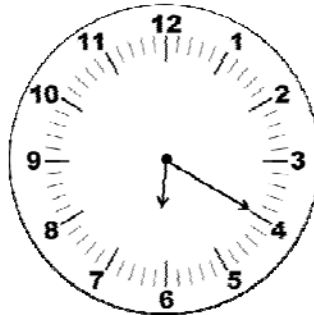
Telling Time and Elapsed Time Problem Solvers 3

Calculate how much time elapsed from the start time to the end time.

A) Start time

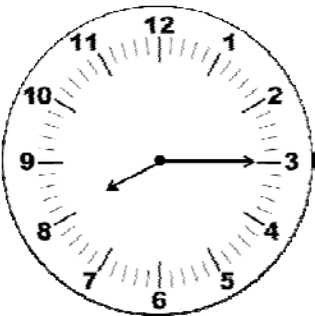


End Time



Answer:

B) Start Time



End Time



Answer:

C) Start Time



End Time



Answer:

Name: Date:

Telling Time and Elapsed Time Problem Solvers 4

A) Jason started running on Saturday morning at 8:10 a.m. He ran for a total of 1 hour and 44 minutes. What time did Jason finish running?

Answer:

B) Madison put a pie in the oven at 3:22 p.m. She let the pie bake for 52 minutes and then took it out of the oven. What time did Madison take the pie out of the oven?

Answer:

C) Sean's basketball game ended at 7:35 p.m. The game lasted for 2 hours and 12 minutes. What time did the game start?

Answer:

D) Ron had to drive out of town for work. He started driving at 6:37 a.m. and drove until 9:46 a.m. to reach his destination. How long did the trip last?

Answer:

E) Katelyn and her friends decided to watch a movie. The movie ended at 8:28 p.m. and lasted for 1 hour and 53 minutes. What time did the movie start?

Answer:

Name: Date:

Telling Time and Elapsed Time Problem Solvers 5

Calculate how much time elapsed from the start time to the end time.

A) Start time



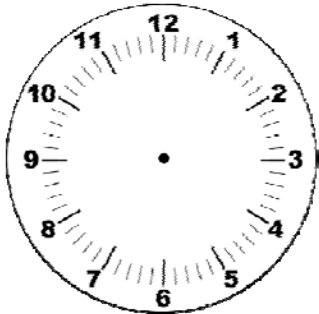
End Time



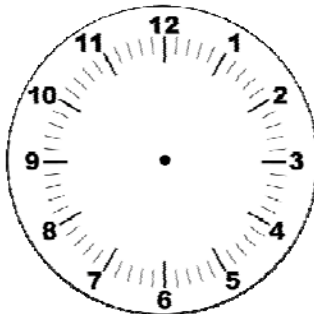
Answer:

Draw the correct times on the clocks below.

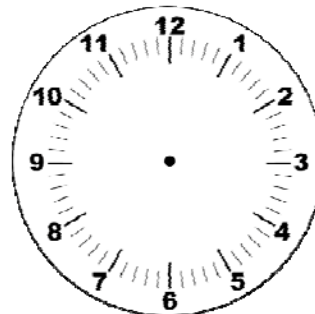
B) 9:17



C) 4:33



D) 12:49



E) Sam was running in a marathon. He started the race at 7:45 a.m. After running for 3 hours and 27 minutes, he crossed the finish line. What time did Sam finish the race?

Answer:

F) Mary went to see a musical performance. The musical performance lasted for 2 hours and 41 minutes and ended at 8:06 p.m. What time did the musical performance start?

Answer:

ANSWER KEY

Telling Time and Elapsed Time Problem Solvers I

Write the time to the nearest minute in digital form.

A)



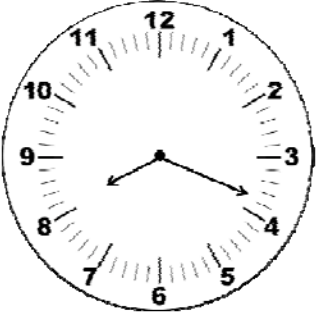
Answer: **10:04**

B)



Answer: **1:34**

C)



Answer: **8:19**

D)



Answer: **5:49**

E)



Answer: **2:09**

F)



Answer: **11:24**

ANSWER KEY

Telling Time and Elapsed Time Problem Solvers 2

Draw the correct time on the clocks below.

A) 12:43



B) 4:27



C) 2:14



D) 8:51



E) 5:38



F) 7:02



ANSWER KEY

Telling Time and Elapsed Time Problem Solvers 3

Calculate how much time elapsed from the start time to the end time.

A) Start time

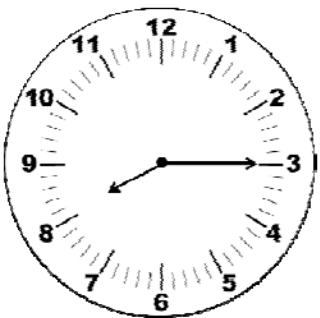


End Time



Answer: **3 hr. 36 min.**

B) Start Time

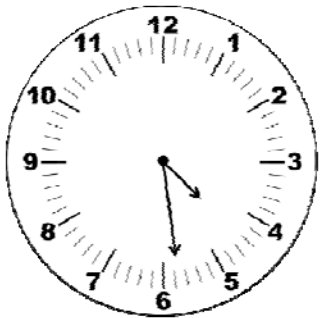


End Time



Answer: **1 hr. 39 min.**

C) Start Time



End Time



Answer: **5 hr. 35 min.**

ANSWER KEY

Telling Time and Elapsed Time Problem Solvers 4

- A) Jason started running on Saturday morning at 8:10 a.m. He ran for a total of 1 hour and 44 minutes. What time did Jason finish running?

Answer: 9:54 a.m.

- B) Madison put a pie in the oven at 3:22 p.m. She let the pie bake for 52 minutes and then took it out of the oven. What time did Madison take the pie out of the oven?

Answer: 4:14 p.m.

- C) Sean's basketball game ended at 7:35 p.m. The game lasted for 2 hours and 12 minutes. What time did the game start?

Answer: 5:23 p.m.

- D) Ron had to drive out of town for work. He started driving at 6:37 a.m. and drove until 9:46 a.m. to reach his destination. How long did the trip last?

Answer: 3 hr. 9 min.

- E) Katelyn and her friends decided to watch a movie. The movie ended at 8:28 p.m. and lasted for 1 hour and 53 minutes. What time did the movie start?

Answer: 6:35 p.m.

ANSWER KEY

Telling Time and Elapsed Time Problem Solvers 5

Calculate how much time elapsed from the start time to the end time.

A)

Start time



End Time



Answer: 4 hr. 46 min.

Draw the correct times on the clocks below.

B) 9:17



C) 4:33



D) 12:49



E) Sam was running in a marathon. He started the race at 7:45 a.m. After running for 3 hours and 27 minutes, he crossed the finish line. What time did Sam finish the race?

Answer: 11:12 a.m.

F) Mary went to see a musical performance. The musical performance lasted for 2 hours and 41 minutes and ended at 8:06 p.m. What time did the musical performance start?

Answer: 5:25 p.m.

Thank You

Thank you for purchasing this product. To see more of my products please visit my Teachers Pay Teachers Store at

<http://www.teacherspayteachers.com/Store/Ready-Lessons>

The purchaser of the license may use this product for personal use and for their own classroom only.



Credits

Graphics Copyright Scrappin Doodles



www.scrappindoodles.com

Heather Ayers, Fun for Learning

<http://www.teacherspayteachers.com/Store/Fun-For-Learning>

Clip Art created by Jason's Online Classroom

<http://www.teacherspayteachers.com/Store/Jasons-Online-Classroom>

Font by KG Fonts



<http://www.teacherspayteachers.com/Store/Kimberly-Geswein-Fonts>