

Two-Step Word Problems Puzzles

*Contains 20 puzzles

Otis and Sarah went to a birthday party where they ate cookies. Otis ate seven cookies and Sarah ate two fewer cookies than Otis. How many cookies did Otis and Sarah eat combined?

$7 - 2$

$5 + 7$


12

Jazmin was planning a family reunion and invited 184 guests. On the day of the reunion, 34 of the invited guests did not show up. Sixteen people showed up that were not invited. How many guests were at the reunion?

$184 - 34$

$150 + 16$


166



How to play:

1. Remove puzzle pieces from the container.
2. Match the pieces together.
There are 4 pieces per puzzle.

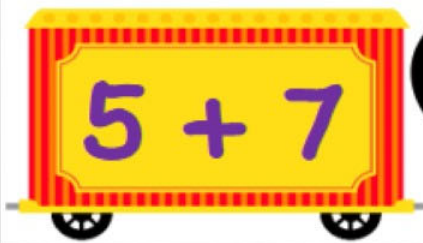
Example:



3. Clean up and make sure all pieces are put back in the container.



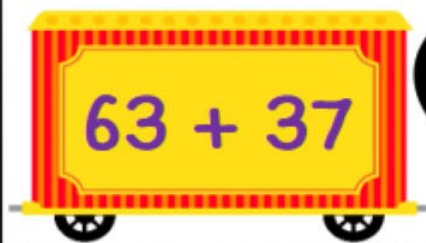
Otis and Sarah went to a birthday party where they ate cookies. Otis ate seven cookies and Sarah ate two fewer cookies than Otis. How many cookies did Otis and Sarah eat combined?




Jazmin was planning a family reunion and invited 184 guests. On the day of the reunion, 34 of the invited guests did not show up. Sixteen people showed up that were not invited. How many guests were at the reunion?



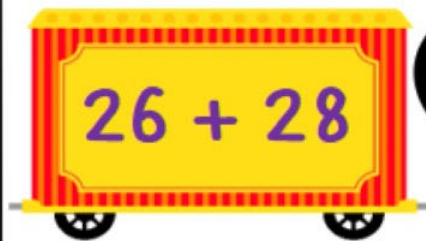
Tom likes to collect football cards and has 29 cards. Jeff decided to give 34 of his cards to Tom. Later that week Tom bought 37 cards. How many cards does Tom have now?




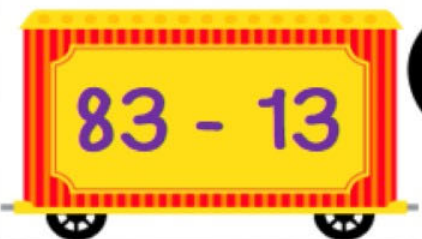
Sue bought 30 stamps and then her mom bought her 25 stamps for her collection. Three of her stamps got lost. How many stamps does Sue have now?





Harper and June went on a plane flight. Harper brought one bag that weighed 28 pounds. June brought two bags that weighed 13 pounds each. How many pounds of bags did Harper and June bring?



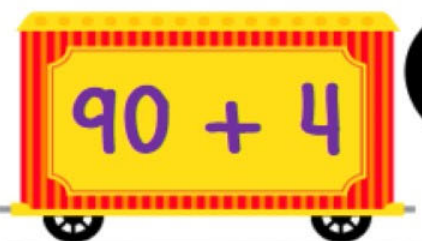

Mariah and Jane went to the farm to collect eggs. Mariah collected 38 eggs and Jane collected 45 eggs. Thirteen eggs broke on the way back home. How many eggs do Mariah and Jane have now?



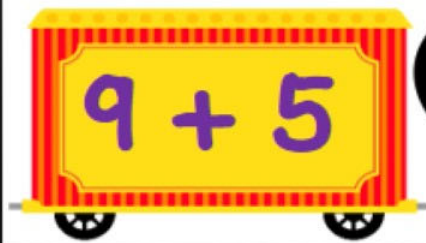
Christina and Matthew each had thirty-three pennies. They combined their pennies to buy candy at the store. They bought two pieces of gum for fifty-eight cents. How many pennies do Christina and Matthew have now?




Will went to the zoo and bought three popsicles for thirty pennies each. Then Will bought three pieces of candy for four pennies total. How many pennies did Will spend at the zoo?




Conner was practicing for a 5k race. On Monday, Tuesday, and Wednesday, he ran three miles each day. The rest of the week he ran five total miles. How many total miles did Conner run during the week?





Holly had five packages with eight hot dogs in each in the refrigerator. If Holly cooked 18 hot dogs for a party, how many hot dogs are left in the refrigerator?



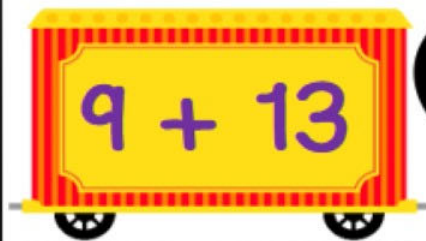
Chelsi was doing laundry and had 33 pairs of socks. She lost seven socks after doing the laundry. How many socks does she have now?



Cane was cooking pancakes. He made four batches of pancakes with seven pancakes in each batch. If Cane's family ate twenty-one pancakes, how many pancakes are left?




Juliet and Major were at the fair. Juliet had thirteen tickets for rides and Major had four fewer tickets than Juliet. How many tickets did Juliet and Major have together?




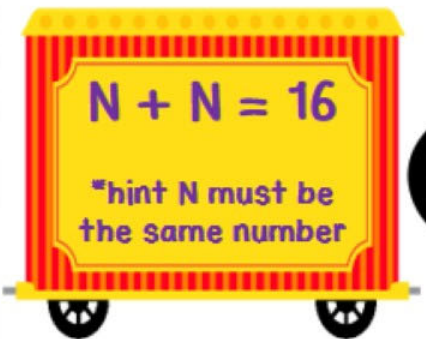
Westley was having a party and there were eighty-nine guests. Before 6:00 p.m. forty-five guests left and after 8:00 p.m. only eighteen guests were left at the party. How many guests left the party between 6 and 8 o'clock?





Lilly, Laura, and Violet were sharing a large pepperoni pizza. The pizza had twenty-four pieces. Lilly and Laura ate six pieces each. Violet ate four pieces. How many pieces were left?




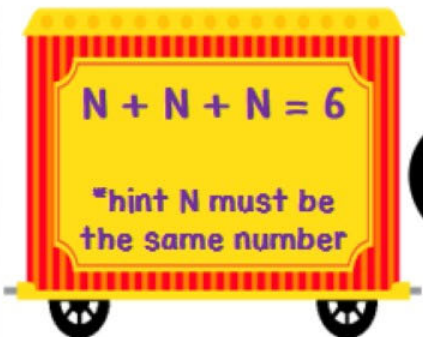

Sam was mixing the dry ingredients in a bowl for a cake. The original recipe called for 7 pounds of flour and 9 pounds of sugar. She needs to cut the recipe in half. How many pounds of dry ingredients does she need?



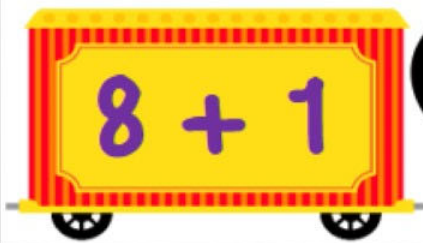

Victoria was shopping for new clothes. She went to the mall with 20 dollars. She bought a shirt for seven dollars and a dress for twelve dollars. How many dollars does Victoria have left?



Howie, Sean, and Jim were sharing a cookie cake. The cookie cake had 12 slices. Each of the boys ate 2 slices and they evenly split the remaining pieces to take home. How many slices of the cookie cake did each boy take home?



Carson was having a movie night. He and his three friends each had two cups of popcorn. Then Carson had another cup of popcorn. How many cups of popcorn did Carson and his friends use for movie night?



Tommy had a garden. In this garden he picked 20 tomatoes and 5 cucumbers and he put them in a basket. The rabbits ate seven of tomatoes from the basket. How many total vegetables does he have left?



Otis and Sarah went to a birthday party where they ate cookies. Otis ate seven cookies and Sarah ate two fewer cookies than Otis. How many cookies did Otis and Sarah eat combined?

$7 - 2$

$5 + 7$

12

Harper and June went on a plane flight. Harper brought one bag that weighed 28 pounds. June brought two bags that weighed 13 pounds each. How many pounds of bags did Harper and June bring?

$13 + 13$

$26 + 28$

54

Jazmin was planning a family reunion and invited 184 guests. On the day of the reunion, 34 of the invited guests did not show up. Sixteen people showed up that were not invited. How many guests were at the reunion?

$184 - 34$

$150 + 16$

166

Mariah and Jane went to the farm to collect eggs. Mariah collected 38 eggs and Jane collected 45 eggs. Thirteen eggs broke on the way back home. How many eggs do Mariah and Jane have now?

$38 + 45$

$83 - 13$

70

Tom likes to collect football cards and has 29 cards. Jeff decided to give 34 of his cards to Tom. Later that week Tom bought 37 cards. How many cards does Tom have now?

$29 + 34$

$63 + 37$

100

Christina and Matthew each had thirty-three pennies. They combined their pennies to buy candy at the store. They bought two pieces of gum for fifty-eight cents. How many pennies do Christina and Matthew have now?

$33 + 33$

$66 - 58$

8

Sue bought 30 stamps and then her mom bought her 25 stamps for her collection. Three of her stamps got lost. How many stamps does Sue have now?

$30 + 25$

$55 - 3$

52

Will went to the zoo and bought three popsicles for thirty pennies each. Then Will bought three pieces of candy for four pennies total. How many pennies did Will spend at the zoo?

$30 + 30 + 30$

$90 + 4$

94

A
N
S
W
E
R
K
E
Y

Conner was practicing for a 5k race. On Monday, Tuesday, and Wednesday, he ran three miles each day. The rest of the week he ran five total miles. How many total miles did Conner run during the week?

$$3 + 3 + 3$$

$$9 + 5$$

$$14$$

Juliet and Major were at the fair. Juliet had thirteen tickets for rides and Major had four fewer tickets than Juliet. How many tickets did Juliet and Major have together?

$$13 - 4$$

$$9 + 13$$

$$22$$

Holly had five packages with eight hot dogs in each in the refrigerator. If Holly cooked 18 hot dogs for a party, how many hot dogs are left in the refrigerator?

$$8 + 8 + 8 + 8 + 8$$

$$40 - 18$$

$$22$$

Westley was having a party and there were eighty-nine guests. Before 6:00 p.m. forty-five guests left and after 8:00 p.m. only eighteen guests were left at the party. How many guests left the party between 6 and 8 o'clock?

$$89 - 45$$

$$44 - 18$$

$$26$$

Chelsi was doing laundry and had 33 pairs of socks. She lost seven socks after doing the laundry. How many socks does she have now?

$$33 + 33$$

$$66 - 7$$

$$59$$

Lilly, Laura, and Violet were sharing a large pepperoni pizza. The pizza had twenty-four pieces. Lilly and Laura ate six pieces each. Violet ate four pieces. How many pieces were left?

$$24 - 12$$

$$12 - 4$$

$$8$$

Cane was cooking pancakes. He made four batches of pancakes with seven pancakes in each batch. If Cane's family ate twenty-one pancakes, how many pancakes are left?

$$7 + 7 + 7 + 7$$

$$28 - 21$$

$$7$$

Sam was mixing the dry ingredients in a bowl for a cake. The original recipe called for 7 pounds of flour and 4 pounds of sugar. She needs to cut the recipe in half. How many pounds of dry ingredients does she need?

$$9 + 7$$

$$N + N = 16$$

*hint N must be the same number

$$8$$

A
N
S
W
E
R
K
E
Y

Victoria was shopping for new clothes. She went to the mall with 20 dollars. She bought a shirt for seven dollars and a dress for twelve dollars. How many dollars does Victoria have left?



$$20 - 19$$

$$1$$

Howie, Sean, and Jim were sharing a cookie cake. The cookie cake had 12 slices. Each of the boys ate 2 slices and they evenly split the remaining pieces to take home. How many slices of the cookie cake did each boy take home?



$$N + N + N = 6$$

*hint N must be the same number

$$2$$


Carson was having a movie night. He and his three friends each had two cups of popcorn. Then Carson had another cup of popcorn. How many cups of popcorn did Carson and his friends use for movie night?



$$8 + 1$$

$$9$$

Tommy had a garden. In this garden he picked 20 tomatoes and 5 cucumbers and he put them in a basket. The rabbits ate seven of tomatoes from the basket. How many total vegetables does he have left?



$$25 - 7$$

$$18$$

A
N
S
W
E
R

K
E
Y

Thank You

Thank you for purchasing this product. To see more of my products please visit my Teachers Pay Teachers Store at <http://www.teacherspayteachers.com/Store/Ready-Lessons>

The purchaser of the license may use this product for personal use and for their own classroom only.




Credits

Creative Clips by Krista Wallden



<http://www.teacherspayteachers.com/Store/Krista-Wallden>

I'm Lovin' Lit



<http://imlovinlit.blogspot.com>

Images licensed by Dancing Crayon Designs. ©



<http://www.dancingcrayon.com/>