



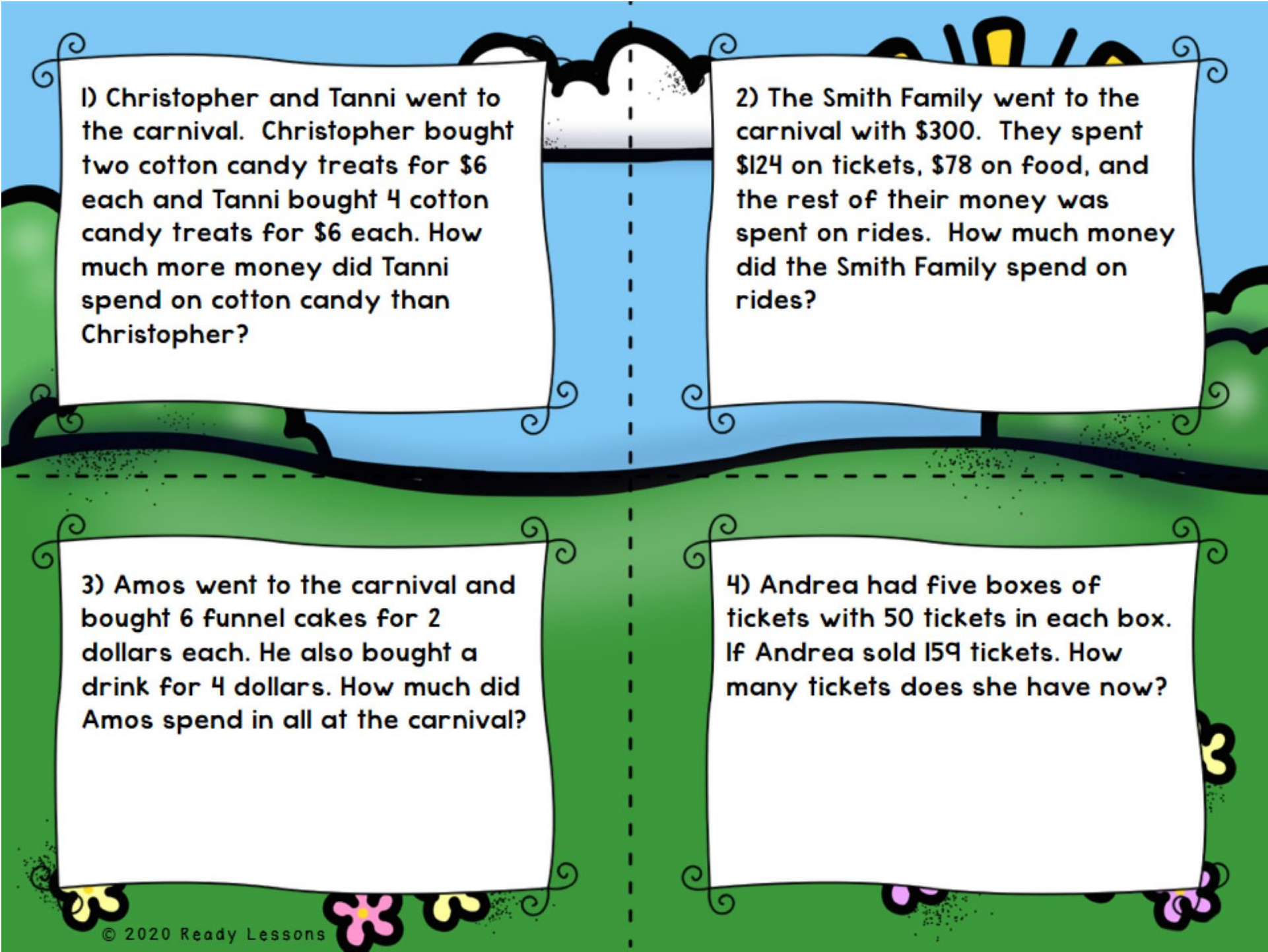
# 2 Step Word Problems Task Cards

A ticket booth with a sign that says "Tickets" and a cartoon attendant.

1) Christopher and Tanni went to the carnival. Christopher bought two cotton candy treats for \$6 each and Tanni bought 4 cotton candy treats for \$6 each. How much more money did Tanni spend on cotton candy than Christopher?

A colorful carousel with a red and yellow striped canopy and purple, pink, and blue horses.

2) The Smith Family went to the carnival with \$300. They spent \$124 on tickets, \$78 on food, and the rest of their money was spent on rides. How much money did the Smith Family spend on rides?



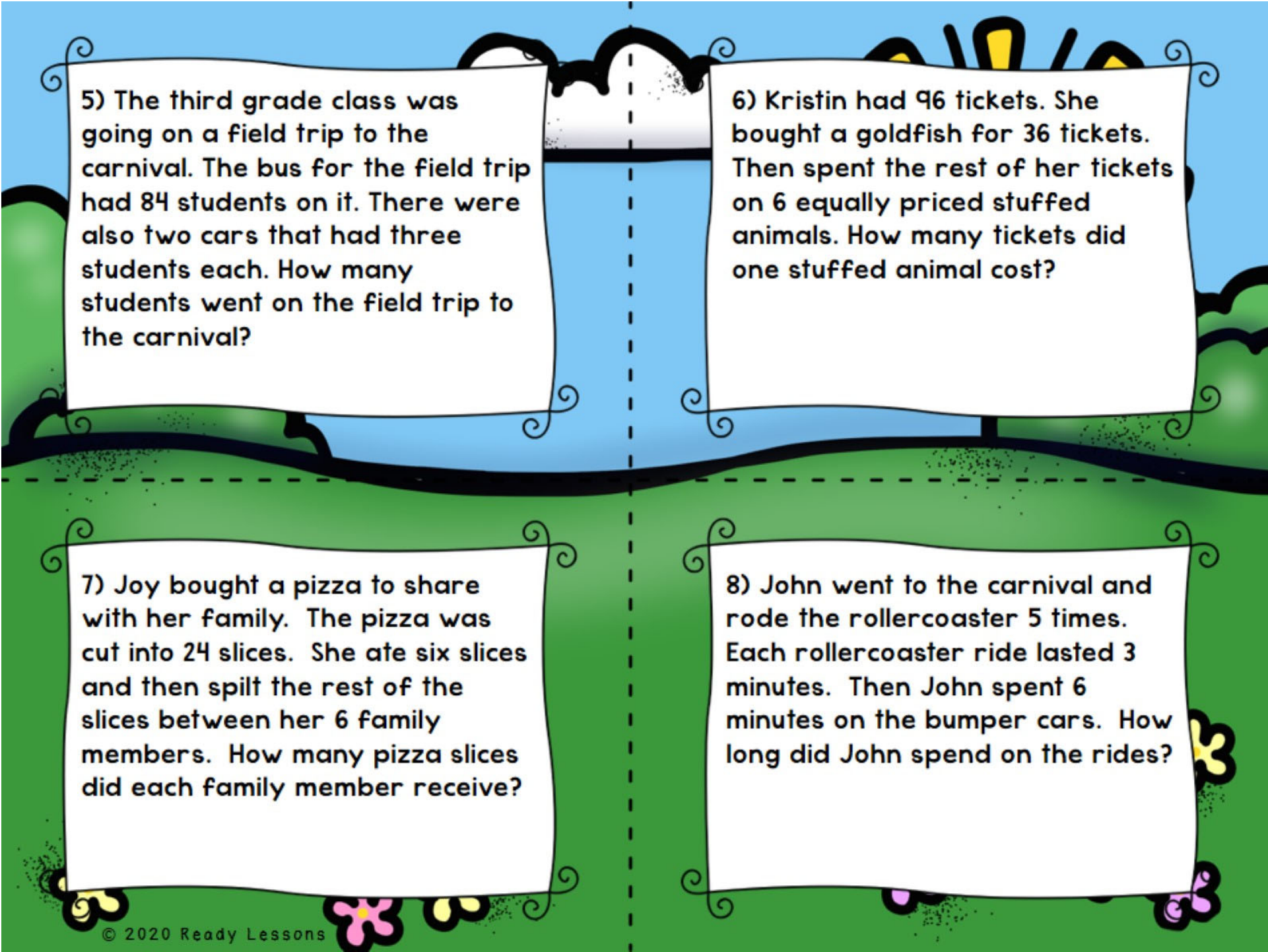
1) Christopher and Tanni went to the carnival. Christopher bought two cotton candy treats for \$6 each and Tanni bought 4 cotton candy treats for \$6 each. How much more money did Tanni spend on cotton candy than Christopher?

2) The Smith Family went to the carnival with \$300. They spent \$124 on tickets, \$78 on food, and the rest of their money was spent on rides. How much money did the Smith Family spend on rides?

3) Amos went to the carnival and bought 6 funnel cakes for 2 dollars each. He also bought a drink for 4 dollars. How much did Amos spend in all at the carnival?

4) Andrea had five boxes of tickets with 50 tickets in each box. If Andrea sold 159 tickets. How many tickets does she have now?



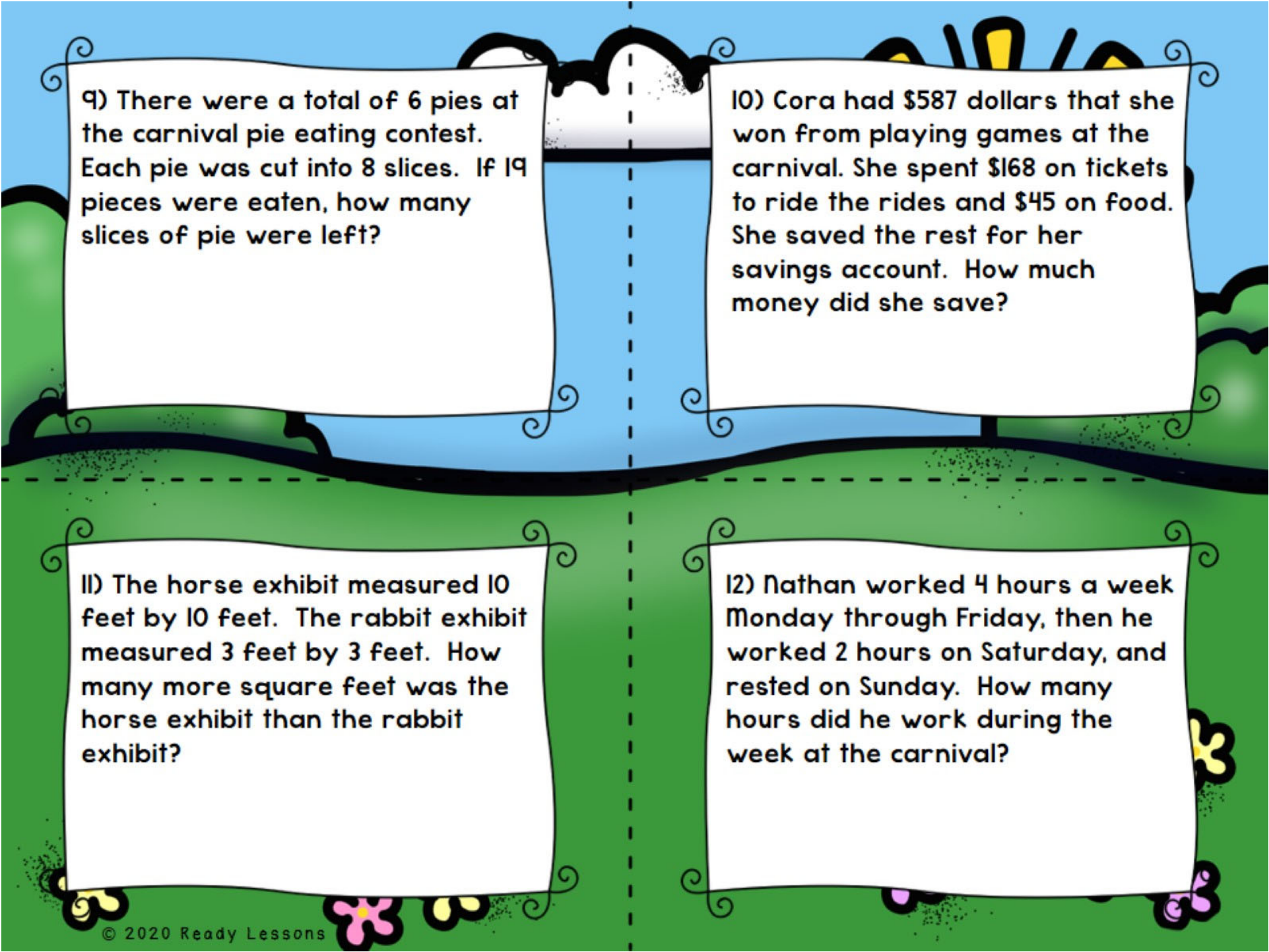


5) The third grade class was going on a field trip to the carnival. The bus for the field trip had 84 students on it. There were also two cars that had three students each. How many students went on the field trip to the carnival?

6) Kristin had 96 tickets. She bought a goldfish for 36 tickets. Then she spent the rest of her tickets on 6 equally priced stuffed animals. How many tickets did one stuffed animal cost?

7) Joy bought a pizza to share with her family. The pizza was cut into 24 slices. She ate six slices and then split the rest of the slices between her 6 family members. How many pizza slices did each family member receive?

8) John went to the carnival and rode the rollercoaster 5 times. Each rollercoaster ride lasted 3 minutes. Then John spent 6 minutes on the bumper cars. How long did John spend on the rides?



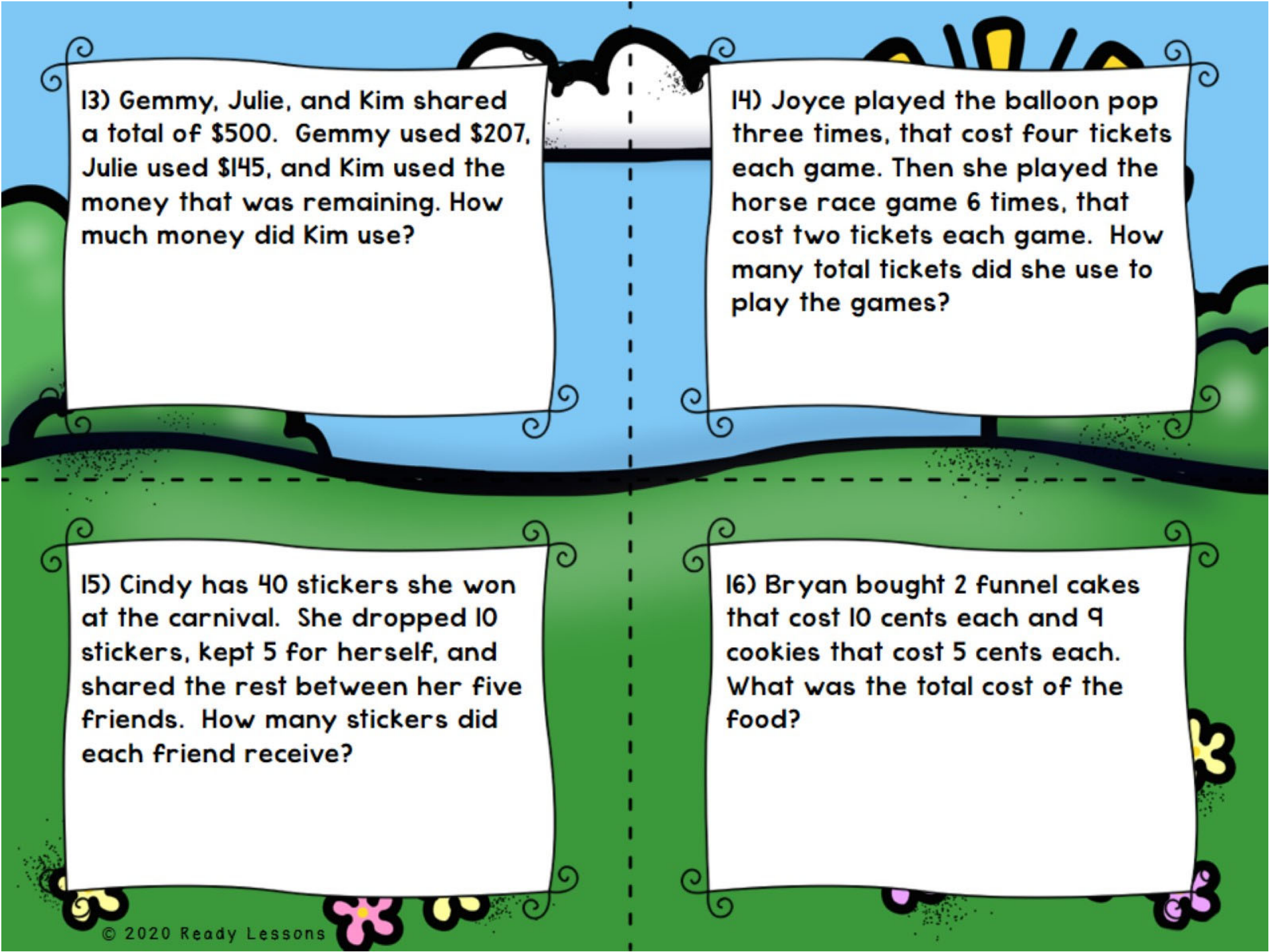
9) There were a total of 6 pies at the carnival pie eating contest. Each pie was cut into 8 slices. If 19 pieces were eaten, how many slices of pie were left?

10) Cora had \$587 dollars that she won from playing games at the carnival. She spent \$168 on tickets to ride the rides and \$45 on food. She saved the rest for her savings account. How much money did she save?

11) The horse exhibit measured 10 feet by 10 feet. The rabbit exhibit measured 3 feet by 3 feet. How many more square feet was the horse exhibit than the rabbit exhibit?

12) Nathan worked 4 hours a week Monday through Friday, then he worked 2 hours on Saturday, and rested on Sunday. How many hours did he work during the week at the carnival?



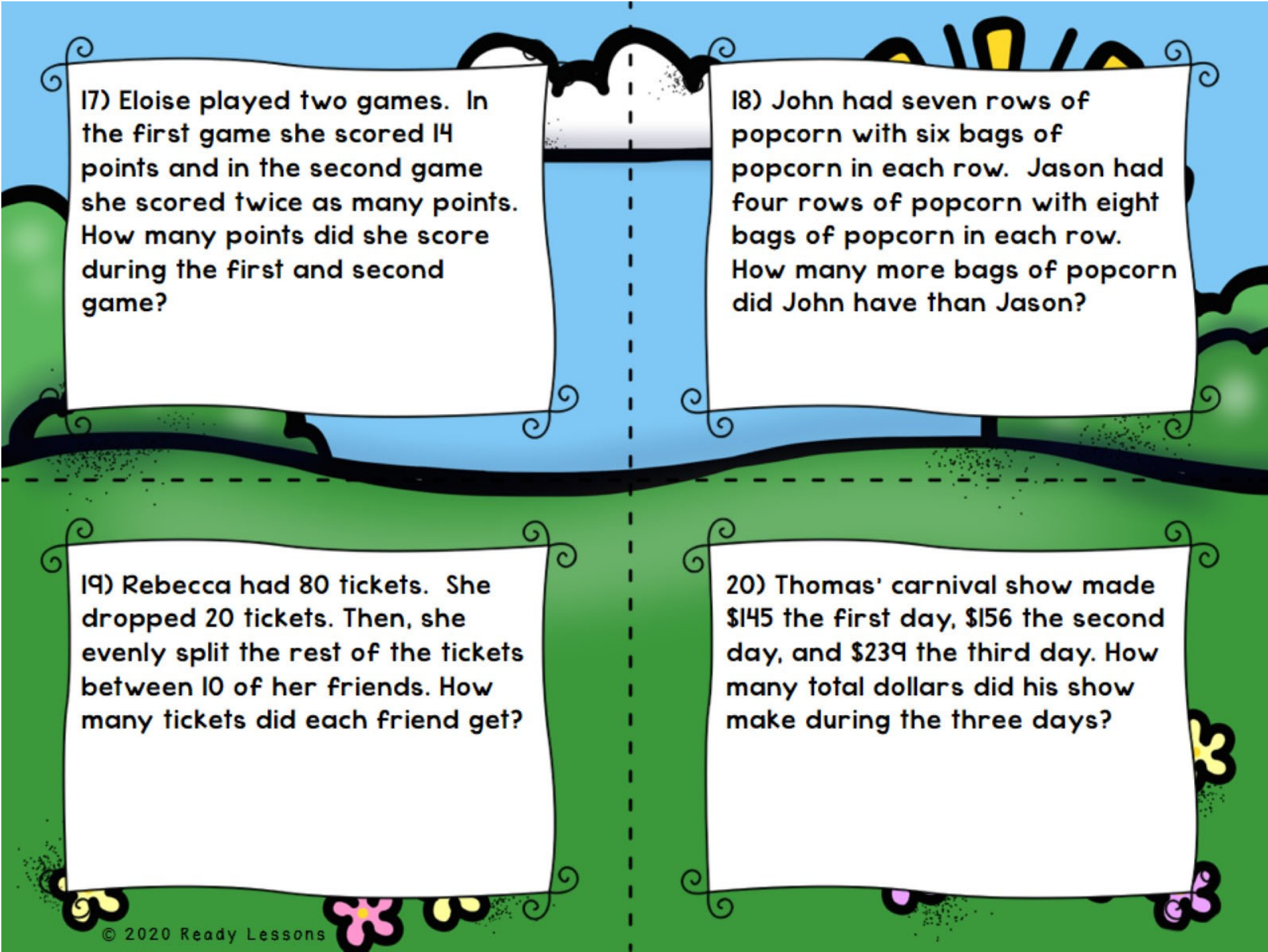


13) Gemmy, Julie, and Kim shared a total of \$500. Gemmy used \$207, Julie used \$145, and Kim used the money that was remaining. How much money did Kim use?

14) Joyce played the balloon pop three times, that cost four tickets each game. Then she played the horse race game 6 times, that cost two tickets each game. How many total tickets did she use to play the games?

15) Cindy has 40 stickers she won at the carnival. She dropped 10 stickers, kept 5 for herself, and shared the rest between her five friends. How many stickers did each friend receive?

16) Bryan bought 2 funnel cakes that cost 10 cents each and 9 cookies that cost 5 cents each. What was the total cost of the food?



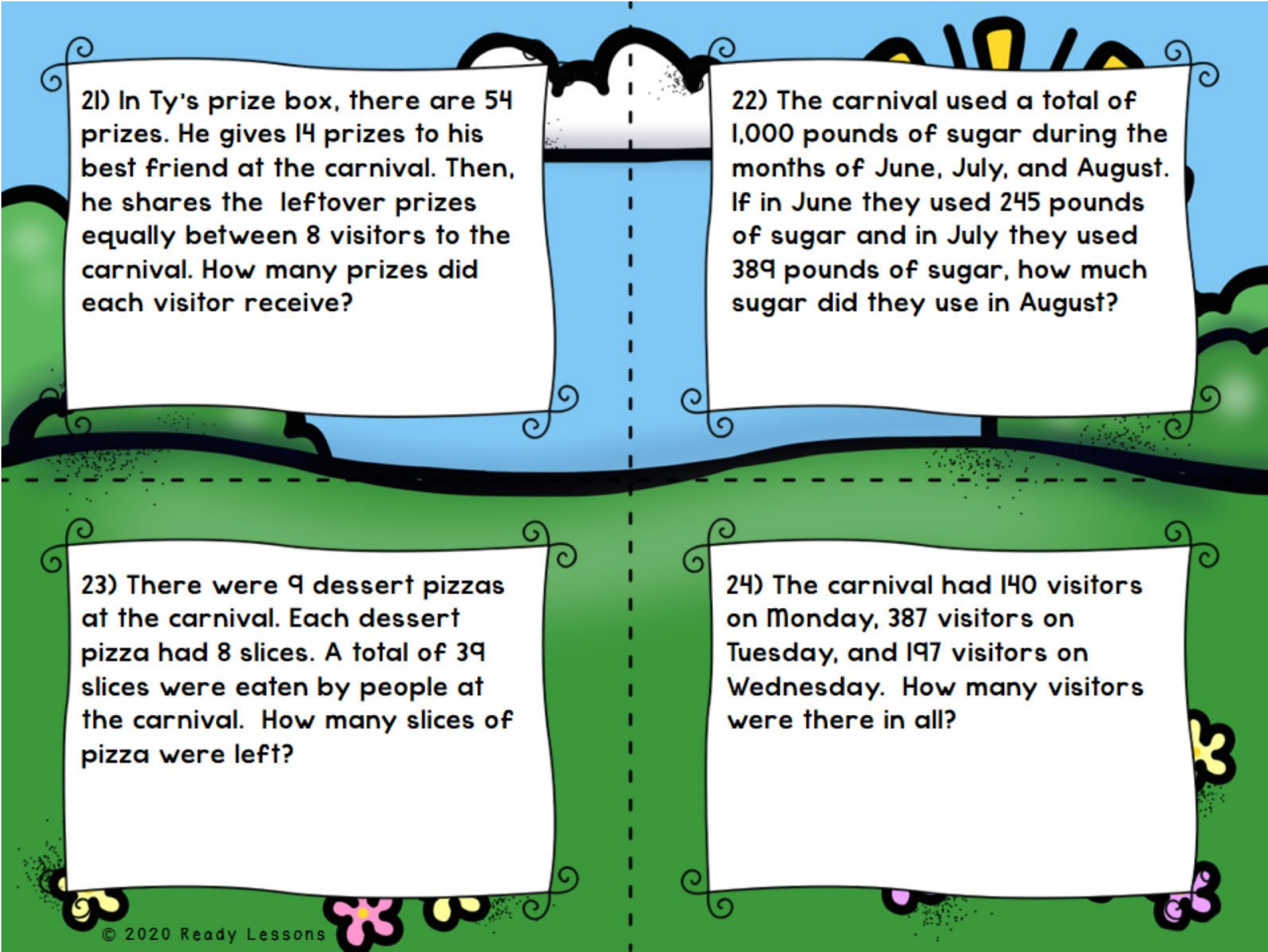
17) Eloise played two games. In the first game she scored 14 points and in the second game she scored twice as many points. How many points did she score during the first and second game?

18) John had seven rows of popcorn with six bags of popcorn in each row. Jason had four rows of popcorn with eight bags of popcorn in each row. How many more bags of popcorn did John have than Jason?

19) Rebecca had 80 tickets. She dropped 20 tickets. Then, she evenly split the rest of the tickets between 10 of her friends. How many tickets did each friend get?

20) Thomas' carnival show made \$145 the first day, \$156 the second day, and \$239 the third day. How many total dollars did his show make during the three days?





21) In Ty's prize box, there are 54 prizes. He gives 14 prizes to his best friend at the carnival. Then, he shares the leftover prizes equally between 8 visitors to the carnival. How many prizes did each visitor receive?

22) The carnival used a total of 1,000 pounds of sugar during the months of June, July, and August. If in June they used 245 pounds of sugar and in July they used 389 pounds of sugar, how much sugar did they use in August?

23) There were 9 dessert pizzas at the carnival. Each dessert pizza had 8 slices. A total of 39 slices were eaten by people at the carnival. How many slices of pizza were left?

24) The carnival had 140 visitors on Monday, 387 visitors on Tuesday, and 197 visitors on Wednesday. How many visitors were there in all?

# ANSWER KEY

1) 12

2) 98

3) 16

4) 91

5) 90

6) 10

7) 3

8) 21

9) 29

10) 374

11) 91

12) 22

13) 148

14) 24

15) 5

16) 65

17) 42

18) 10

19) 6

20) 540

21) 5

22) 366

23) 33

24) 724



# Free Multiplication Array Puzzles

[Click here to get them now!](#)



# Thank You

Thank you for purchasing this product. To see more of my products please visit my Teachers Pay Teachers Store at <http://www.teacherspayteachers.com/Store/Ready-Lessons>


The purchaser of the license may use this product for personal use and for their own classroom only.





# Credits

Educlips



<http://www.edu-clips.com>

I'm Lovin' Lit



<http://imlovinlit.blogspot.com>