

2 Step Word Problems Task Cards

1) Sally and Dale went to visit the farm to bake some pies. Dale brought one bag of flour that measures 5 pounds. Sally brought four bags of flour that weigh 7 pounds each. How many pounds of flour did Sally and Dale bring to bake some pies?



2) Jack was practicing for a 5k race on a farm. On Monday, Tuesday, and Wednesday, he ran three miles each day. On Thursday he ran seven miles. How many total miles did Jack run during Monday through Thursday?



1) Sally and Dale went to visit the farm to bake some pies. Dale brought one bag of flour that measures 5 pounds. Sally brought four bags of flour that weigh 7 pounds each. How many pounds of flour did Sally and Dale bring to bake some pies?



2) Jack was practicing for a 5k race on a farm. On Monday, Tuesday, and Wednesday, he ran three miles each day. On Thursday he ran seven miles. How many total miles did Jack run during Monday through Thursday?



3) Derek went to the Farmers' Market and bought 6 packages of apples for 2 dollars each. He also bought a drink for 4 dollars. How much did Derek spend in all at the Farmers' Market?



4) Shawn had five baskets of eggs. Each basket had ten eggs. He gave away seven eggs. How many eggs does he have?



5) The third grade class was going on a field trip to the pumpkin patch. The bus for the field trip had 74 students on it. There were also four cars that had four students each. How many students went on the field trip?



6) Penny had 189 cups of chicken feed. On Monday, she used 87 cups of feed. On Tuesday, she used 44 cups of feed. How many cups of chicken feed does she have left?



7) Farmer Julia talked on the phone for 40 minutes with her sister. She talked on the phone with her dad for half of the amount of time she talked to her sister. How many total minutes did Farmer Julia talk on the phone to both her sister and dad?



8) Thomas had 3 goats that each had 7 baby goats on the farm. Another goat had 3 baby goats on the farm. How many baby goats are on Thomas' farm?



9) Elizabeth went to the pet store to buy new animals for the farm. She bought 6 rabbits that cost 8 dollars each and she bought a chicken that cost 25 dollars. How much money did Elizabeth spend at the pet store?



10) Justin had 87 dollars. He spent 24 dollars on vegetables. Then spent the rest of his money on nine equally priced packs of chicken. How much did each pack of chicken cost?



11) Hugo had a strawberry patch that measured 7 feet by 9 feet. He also had a blueberry patch that measured 4 feet by 5 feet. How many square feet did the strawberry and blueberry patch measure altogether?



12) Joshua worked 8 hours a day Monday through Friday. Then he worked 3 hours on Saturday and rested on Sunday. How many hours did he work during the week?



13) Justin harvested 1,000 ears of corn. He gave 319 ears of corn to a local food bank and 215 ears of corn to a school. How many ears of corn does he have left?



14) Joy picked 614 tomatoes to sell at the store. Her friend Tessa gave her 87 more tomatoes to sell. Her other friend Kelsey gave her 562 tomatoes to sell. How many tomatoes does she have to sell in all now?



15) Farmer Terry had \$890 to spend on new farm supplies. He spent \$439 on new soil and \$146 on new shovels. How much money does Farmer Terry have now?



16) Lilly made a lemonade stand on the farm. She was selling lemonade and cookies. She sold 9 cups lemonade for 6 cents each and sold a total of 45 cents worth of cookies. How many total cents did she sell of cookies and lemonade?




17) Warren had 27 apples. He kept six of the apples for himself and then shared the rest equally between his friends Wendy, West, and Whit. How many apples did each friend receive?



18) Hayes planted four rows of corn with seven corn plants in each row. Hadley planted 3 rows of corn with three corn plants in each row. How many more corn plants did Hayes plant than Hadley?



19) Rebecca had 70 eggs. She dropped and broke 10 eggs. Then, she evenly split the rest of the eggs in 10 boxes. How many eggs would be in each box?



20) Steve went pumpkin picking and he picked 74 orange pumpkins, 26 green pumpkins and 13 white pumpkins. How many total pumpkins did Steve pick?



21) Frank had 7 horses. If each horse eats 3 carrots per day, how many carrots would he need to feed all the horses for 2 days?



22) Nate and Tommy went fishing on the lake. Nate used 8 worms every hour and Tommy used 4 worms every hour. How many worms did Tommy and Nate use in three hours?



23) Mary had 374 liters of water to water the farm. If she used 93 liters on Monday and 84 liters on Tuesday, how many liters did she have left?



24) James has 20 pig treats and he has 4 pigs. He wants to give each pig a treat every day for an entire week (Monday through Sunday). How many more treats does he need to buy from the store?



ANSWER KEY

1) 33

2) 16

3) 16

4) 43

5) 90

6) 58

7) 60

8) 24

9) 73

10) 7

11) 83

12) 43

13) 466

14) 1,263

15) 305

16) 99

17) 7

18) 19

19) 6

20) 113

21) 42

22) 36

23) 197

24) 8

Free Multiplication Array Puzzles

[Click here to get them now!](#)



Thank You


Thank you for purchasing this product. To see more of my products please visit my Teachers Pay Teachers Store at <http://www.teacherspayteachers.com/Store/Ready-Lessons>

The purchaser of the license may use this product for personal use and for their own classroom only.




Credits

Educlips



<http://www.edu-clips.com>

I'm Lovin' Lit



<http://imlovinlit.blogspot.com>